

# Chemical Reactions And Equations

## Question 1:

Why is respiration considered an exothermic process ?

### Solution :

Respiration is an exothermic process because energy is produced during this process.

## Question 2:

On what basis is a chemical equation balanced ?

### Solution :

A balanced chemical equation has equal number of atoms of different elements in the reactants and products.

## Question 3:

What happens chemically when quicklime is added to water filled in a bucket ?

### Solution :

When quicklime is added to water, it forms slaked lime along with evolution of heat. There will be a rise in temperature of the bucket.

## Question 4:

Why should magnesium ribbon be cleaned before burning in air ?

### Solution :

Magnesium ribbon should be cleaned before burning in air to remove the protective layer of basic magnesium carbonate from its surface.

## Question 5:

State whether the following statement is true or false :

A chemical equation can be balanced easily by altering the formula of a reactant or product.

### Solution :

False.

## Question 6:

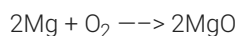
What is wrong with the following chemical equation ?



Correct and balance it.

### Solution :

Oxygen should be in molecular form,  $\text{O}_2$



**Question 7:**

What does the symbol (aq) represent in a chemical equation ?

**Solution :**

The symbol (aq) represents aqueous solution in a chemical equation.

**Question 8:**

Why is photosynthesis considered an endothermic reaction ?

**Solution :**

Photosynthesis is an endothermic reaction because sunlight energy is absorbed by green plants during this process.

**Question 9:**

How will you indicate the following effects in a chemical equation ?

- (a) A solution made in water
- (b) Exothermic reaction
- (c) Endothermic reaction

**Solution :**

(a) Aqueous solution is indicated by the symbol 'aq'.

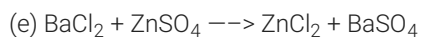
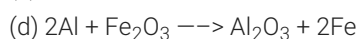
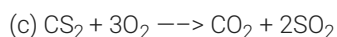
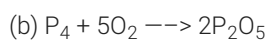
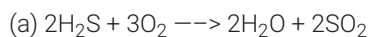
An exothermic reaction is indicated by writing "+Heat" or "+Heat energy" or "+Energy" on the products side of an equation.

An endothermic reaction is indicated by writing "+Heat" or "+Heat energy" or "+Energy" on the reactants side of an equation.

**Question 10:**

Translate the following statements into chemical equations and then balance the equations :

- (a) Hydrogen sulphide gas burns in air to give water and sulphur dioxide.
- (b) Phosphorus burns in oxygen to give phosphorus pentoxide.
- (c) Carbon disulphide burns in air to give carbon dioxide and sulphur dioxide.
- (d) Aluminium metal replaces iron from ferric oxide, Fe<sub>2</sub>O<sub>3</sub>, giving aluminium oxide and iron.
- (e) Barium chloride reacts with zinc sulphate to give zinc chloride and barium sulphate.

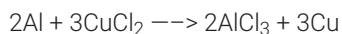
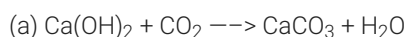
**Solution :****Question 11:**

Write the balanced chemical equations for the following reactions :

- (a) Calcium hydroxide + Carbon dioxide  $\rightarrow$  Calcium carbonate + Water

(b) Aluminium + Copper chloride  $\rightarrow$  Aluminium chloride + Copper


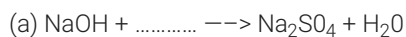
**Solution :**



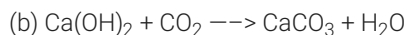
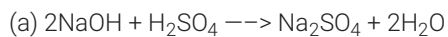
### Lakhmir Singh Chemistry Class 10 Solutions Page No:19

#### Question 12:

Complete and balance the following equations :

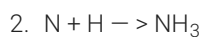
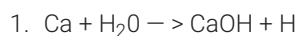


**Solution :**

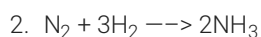
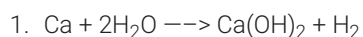


#### Question 13:

Correct and balance the following equations :



**Solution :**

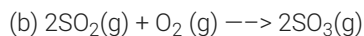
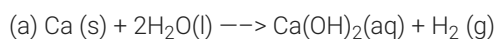


#### Question 14:

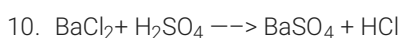
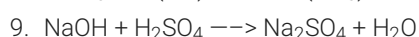
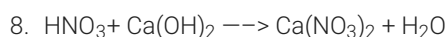
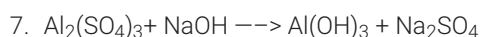
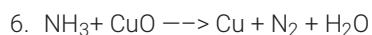
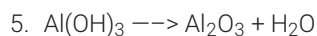
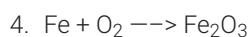
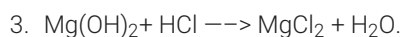
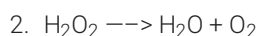
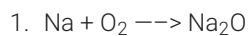
Write complete balanced equations for the following reactions :



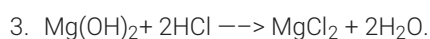
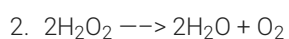
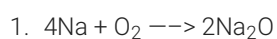
**Solution :**



#### Question 15:



**Solution :**



4.  $4\text{Fe} + 3\text{O}_2 \rightarrow 2\text{Fe}_2\text{O}_3$
5.  $2\text{Al}(\text{OH})_3 \rightarrow \text{Al}_2\text{O}_3 + 3\text{H}_2\text{O}$
6.  $2\text{NH}_3 + 3\text{CuO} \rightarrow 3\text{Cu} + \text{N}_2 + 3\text{H}_2\text{O}$
7.  $\text{Al}_2(\text{SO}_4)_3 + 6\text{NaOH} \rightarrow 2\text{Al}(\text{OH})_3 + 3\text{Na}_2\text{SO}_4$
8.  $2\text{HNO}_3 + \text{Ca}(\text{OH})_2 \rightarrow \text{Ca}(\text{NO}_3)_2 + 2\text{H}_2\text{O}$
9.  $2\text{NaOH} + \text{H}_2\text{SO}_4 \rightarrow \text{Na}_2\text{SO}_4 + 2\text{H}_2\text{O}$
10.  $\text{BaCl}_2 + \text{H}_2\text{SO}_4 \rightarrow \text{BaSO}_4 + 2\text{HCl}$

**Question 16:**

Fill in the following blanks with suitable words :

- (a) Chemical equations are balanced to satisfy the law of.....
- (b) A solution made in water is known as an..... solution and indicated by the symbol.....

**Solution :**

- (a) Conservation of mass
- (b) Aqueous; (aq)

**Question 17:**

- (a) Give one example of a chemical reaction.
- (b) State two characteristics of the chemical reaction which takes place when dilute sulphuric acid is poured over zinc granules.
- (c) Give two characteristics of the chemical reaction which occurs on adding potassium iodide solution to lead nitrate solution.

**Solution :**

- (a) Magnesium Ribbon is heated in the presence of air to form a white powder called magnesium oxide.
- (b) When dilute sulphuric acid is poured over zinc granules

1. there will be a rise in temperature
2. evolution of hydrogen gas.

(c)

1. A yellow precipitate is formed.
2. There will be a change in color (from colourless to yellow).

**Question 18:**

- (a) What is a chemical equation ? Explain with the help of an example.
- (b) Giving examples, state the difference between balanced and unbalanced chemical equations.
- (c) Balance the following chemical equations :

1.  $\text{NH}_3 \rightarrow \text{N}_2 + \text{H}_2$
2.  $\text{C} + \text{CO}_2 \rightarrow \text{CO}$

**Solution :**

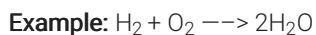
(a) The method of representing a chemical reaction with the help of symbols and formulae of substances involved in it is called a chemical equation.

**Example:** Zinc metal reacts with dilute sulphuric acid to form zinc sulphate and hydrogen gas. This equation is written as:  $\text{Zn} + \text{H}_2\text{SO}_4 \rightarrow \text{ZnSO}_4 + \text{H}_2$

(b) A balanced chemical equation has an equal number of atoms of different elements in the reactants and products. It has equal masses of various elements in the reactants and products.



An unbalanced chemical equation has an unequal number of atoms of one or more elements in the reactants and products. It has unequal masses of various elements in the reactants and products.



(c)

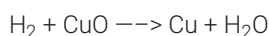
1.  $2\text{NH}_3 \rightarrow \text{N}_2 + 3\text{H}_2$
2.  $\text{C} + \text{CO}_2 \rightarrow 2\text{CO}$

**Question 19:**

When hydrogen is passed over copper oxide, copper and steam are formed. Write a balanced equation for this reaction and state which of the chemicals are :

1. elements
2. compounds
3. reactants
4. products
5. metals
6. non-metals

**Solution :**



1. Elements :  $\text{H}_2$  and Cu
2. Compounds : CuO and  $\text{H}_2\text{O}$
3. Reactants:  $\text{H}_2$  and CuO
4. Products: Cu
5. Metal: Cu
6. Non-metal:  $\text{H}_2$

**Question 20:**

(a) What are the various ways in which a chemical equation can be made more informative ? Give examples to illustrate your answer.

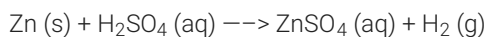
(b) Write balanced chemical equation from the following information :

An aqueous calcium hydroxide solution (lime water) reacts with carbon dioxide gas to produce a solid calcium carbonate precipitate and water.

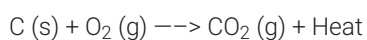
**Solution :**

(a) The various ways in which a chemical equation can be made more informative are :

(i) By indicating the physical states of the reactants and products. Example: Gaseous state is indicated by the symbol (g).

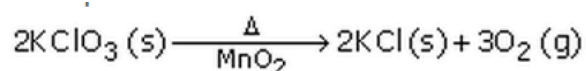


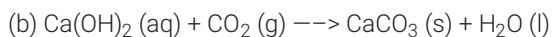
(ii) By indicating the heat changes taking place in the reaction. For example: An exothermic reaction is indicated by writing "+Heat" or "+Heat energy" or "+Energy" on the products side of an equation.



(iii) By indicating the "conditions" under which the reaction takes place.

Example: Delta stands for heat which is written over the arrow of the equation.



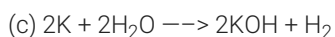


### Question 21:

- (a) What is a balanced chemical equation? Why should chemical equations be balanced?
- (b) Aluminium burns in chlorine to form aluminium chloride ( $\text{AlCl}_3$ ). Write a balanced chemical equation for this reaction.
- (c) Potassium metal reacts with water to give potassium hydroxide and hydrogen gas. Write a balanced chemical equation for this reaction.

### Solution :

(a) A balanced chemical equation has an equal number of atoms of different elements in the reactants and products. It has equal masses of various elements in the reactants and products. A chemical equation should be balanced to satisfy the law of conservation of chemical reactions.



## Lakhmir Singh Chemistry Class 10 Solutions Page No:20

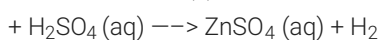
### Question 22:

- (a) Explain, with example, how the physical states of the reactants and products can be shown in a chemical equation.
- (b) Balance the following equation and add state symbols :
- $$\text{Zn} + \text{HCl} \longrightarrow \text{ZnCl}_2 + \text{H}_2$$
- (c) Convey the following information in the form of a balanced chemical equation :  
"An aqueous solution of ferrous sulphate reacts with an aqueous solution of sodium hydroxide to form a precipitate of ferrous hydroxide and sodium sulphate remains in solution."

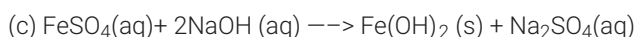
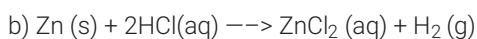
### Solution :

(a) The physical states of the reactants and products are shown by putting the "state symbols" in an equation.

For example:  $\text{Zn} (\text{s})$



(g)



### Question 23:

Write any two observations in an activity which may suggest that a chemical reaction has taken place. Give an example in support of your answer.

### Solution :

1. Evolution of gas.

**For example:** When sodium carbonate reacts with dilute hydrochloric acid, carbon dioxide gas is evolved.

2. Formation of a precipitate.

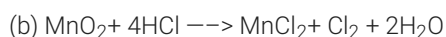
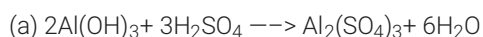
**For example:** When potassium iodide solution is added to a solution of lead nitrate, yellow precipitate of lead iodide is formed.

### Question 24:

- (a) Aluminium hydroxide reacts with sulphuric acid to form aluminium sulphate and water. Write a balanced equation for this reaction.
- (b) Balance the following chemical equation :



**Solution :**



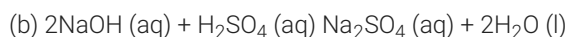
**Question 25:**

Write the balanced equations for the following reactions, and add the state symbols :

(a) Magnesium carbonate reacts with hydrochloric acid to produce magnesium chloride, carbon dioxide and water.

(b) Sodium hydroxide reacts with sulphuric acid to produce sodium sulphate and water.

**Solution :**

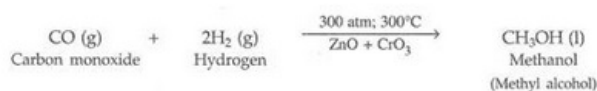


**Question 26:**

Carbon monoxide reacts with hydrogen under certain conditions to form methanol ( $\text{CH}_3\text{OH}$ ).

Write a balanced chemical equation for this reaction indicating the physical states of reactants and product as well as the conditions under which this reaction takes place.

**Solution :**



The conditions for this reaction to take place are: a pressure of 300 atmospheres (written as 300 atm), a temperature of  $300^\circ\text{C}$ , and a catalyst which is a mixture of zinc oxide and chromium oxide ( $\text{ZnO} + \text{CrO}_3$ ).

**Question 27:**

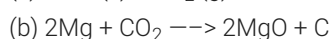
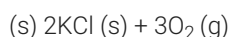
(a) Potassium chlorate ( $\text{KClO}_3$ ) on heating forms potassium chloride and oxygen. Write a balanced equation

for this reaction and indicate the evolution of gas.

(b) Rewrite the following information in the form of a balanced chemical equation :

Magnesium burns in carbon dioxide to form magnesium oxide and carbon.

**Solution :**



**Question 28:**

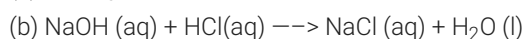
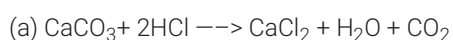
(a) Substitute formulae for names and balance the following equation :

Calcium carbonate reacts with hydrochloric acid to produce calcium chloride, water and carbon dioxide gas.

(b) Write balanced chemical equation with state symbols for the following reaction :

Sodium hydroxide solution reacts with hydrochloric acid solution to produce sodium chloride solution and water.

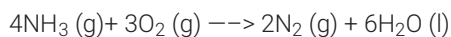
**Solution :**



**Question 29:**

Ammonia reacts with oxygen to form nitrogen and water. Write a balanced chemical equation for this reaction. Add the state symbols for all the reactants and products.

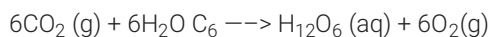
**Solution :**



**Question 30:**

Write a balanced chemical equation for the process of photosynthesis giving the physical states of all the substances involved and the conditions of the reaction.

**Solution :**



Carbon

dioxide Water

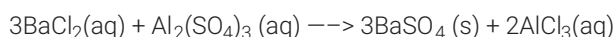
Glucose Oxygen

**Question 31:**

Translate the following statement into chemical equation and then balance it :

Barium chloride solution reacts with aluminium sulphate solution to form a precipitate of barium sulphate and aluminium chloride solution.

**Solution :**



**Question 32:**

When potassium nitrate is heated, it decomposes into potassium nitrite and oxygen. Write a balanced equation for this reaction and add the state symbols of the reactants and products.

**Solution :**



**Question 33:**

(a) What is meant by a chemical reaction ? Explain with the help of an example.

(b) Give one example each of a chemical reaction characterised by :

1. evolution of a gas
2. change in colour
3. formation of a precipitate
4. change in temperature
5. change in state.

**Solution :**

(a)

Chemical reactions are the processes in which new substances with new properties are formed.

For

**example:** When magnesium ribbon is heated, it burns in air to form a white powder called magnesium oxide.

(b)

1. The chemical reaction between zinc and dilute sulphuric acid.
2. The chemical reaction between citric acid and purple coloured potassium permanganate solution is characterised by change in colour (from purple to colourless).
3. The chemical reaction between potassium iodide and lead nitrate is characterised by the formation of a yellow precipitate of lead iodide.
4. The reaction between quick lime and water to form slaked lime is characterised by a change in temperature.
5. When wax is burned, then water and carbon dioxide are formed. Wax is a solid;



water is a liquid whereas carbon dioxide is a gas.

### Lakhmir Singh Chemistry Class 10 Solutions Page No:21

#### Question 34:

- (a) State the various characteristics of chemical reactions.
- (b) State one characteristic each of the chemical reaction which takes place when :
1. dilute hydrochloric acid is added to sodium carbonate
  2. lemon juice is added gradually to potassium permanganate solution
  3. dilute sulphuric acid is added to barium chloride solution
  4. quicklime is treated with water
  5. wax is burned in the form of a candle

#### Solution :

(a) The various characteristics of chemical reactions are:

1. Evolution of a gas
2. Formation of a precipitate
3. Change in colour
4. Change in temperature
5. Change in state.

(b)

1. Evolution of carbon dioxide gas
2. Change in colour from purple to colourless
3. Formation of white precipitate of barium sulphate
4. Change in temperature
5. Change in state from solid to liquid and gas.

#### Question 35:

- (a) What do you understand by exothermic and endothermic reactions ?
- (b) Give one example of an exothermic reaction and one of an endothermic reaction.
- (c) Which of the following are endothermic reactions and which are exothermic reactions ?

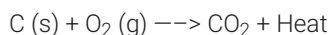
1. Burning of natural gas
2. Photosynthesis
3. Electrolysis of water
4. Respiration
5. Decomposition of calcium carbonate

#### Solution :

(a) Those reactions in which heat is evolved are known as exothermic reactions.

The reactions in which heat is absorbed are known as endothermic reactions.

(b) Example of exothermic reaction:



**Example of endothermic reaction:**



(c) Endothermic reactions: Photosynthesis, Electrolysis of water, Decomposition of calcium carbonate.

Exothermic reactions: Burning of natural gas, Respiration.

**Question 46:**

When the solution of substance X is added to a solution of potassium iodide, then a yellow solid separates out from the solution.

- (a) What do you think substance X is likely to be ?
- (b) Name the substance which the yellow solid consists of.
- (c) Which characteristic of chemical reactions is illustrated by this example ?
- (d) Write a balanced chemical equation for the reaction which takes place. Mention the physical states of all the reactants and products involved in the chemical equation.

**Solution :**

- (a) Lead nitrate.
- (b) Lead iodide.
- (c) Formation of a precipitate.
- (d)  $\text{Pb}(\text{NO}_3)_2 (\text{aq}) + 2\text{KI} (\text{aq}) \rightarrow \text{PbI}_2 (\text{s}) + 2\text{KNO}_3 (\text{aq})$

**Question 47:**

When water is added gradually to a white solid X, a hissing sound is heard and a lot of heat is produced forming a product Y. A suspension of Y in water is applied to the walls of a house during white washing. A clear solution of Y is also used for testing carbon dioxide gas in the laboratory.

- (a) What could be solid X ? Write its chemical formula.
- (b) What could be product Y ? Write its chemical formula.
- (c) What is the common name of the solution of Y which is used for testing carbon dioxide gas ?
- (d) Write chemical equation of the reaction which takes place on adding water to solid X.
- (e) Which characteristic of chemical reactions is illustrated by this example ?

**Solution :**

- (a) Calcium oxide, CaO.
- (b) Calcium hydroxide,  $\text{Ca}(\text{OH})_2$
- (c) Lime water.
- (d)  $\text{CaO} + \text{H}_2\text{O} \rightarrow \text{Ca}(\text{OH})_2$
- (e) Change in temperature.

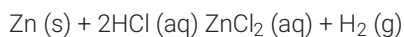
**Question 48:**

When metal X is treated with a dilute acid Y, then a gas Z is evolved which burns readily by making a little explosion.

- (a) Name any two metals which can behave like metal X.
- (b) Name any two acids which can behave like acid Y.
- (c) Name the gas Z.
- (d) Is the gas Z lighter than or heavier than air ?
- (e) Is the reaction between metal X and dilute acid Y exothermic or endothermic ?
- (f) By taking a specific example of metal X and dilute acid Y, write a balanced chemical equation for the reaction which takes place. Also indicate physical states of all the reactants and products.

**Solution :**

- (a) Zinc and Iron.
- (b) Dilute hydrochloric acid and dilute sulphuric acid.
- (c) Hydrogen.
- (d) Lighter than air.
- (e) Exothermic.
- (f) Suppose metal X is zinc (Zn) and acid Y is dilute hydrochloric acid (HCl) ;

**Question 49:**

A solid substance P which is very hard is used in the construction of many buildings, especially flooring. When substance P is heated strongly, it decomposes to form another solid Q and a gas R is given out. Solid Q reacts with water with the release of a lot of heat to form a substance S. When gas R is passed into a clear solution of substance S, then a white precipitate of substance T is formed. The substance T has the same chemical composition as starting substance P.

- What is substance P ? Write its common name as well as chemical formula.
- What is substance Q ?
- What is gas R ?
- What is substance S ? What is its clear solution known as ?
- What is substance T ? Name any two natural forms in which substance T occurs in nature.

**Solution :**

- Calcium carbonate (limestone),  $\text{CaCO}_3$
- Calcium oxide,  $\text{CaO}$
- Carbon dioxide,  $\text{CO}_2$
- Calcium hydroxide,  $\text{Ca(OH)}_2$ ; Lime water.
- Calcium carbonate; Limestone and Marble.

**Lakhmir Singh Chemistry Class 10 Solutions Page No:23****Question 50:**

A silvery-white metal X taken in the form of ribbon, when ignited, burns in air with a dazzling white flame to form a white powder Y. When water is added to powder Y, it dissolves partially to form another substance Z.

- What could metal X be ?
- What is powder Y ?
- With which substance metal X combines to form powder Y ?
- What is substance Z ? Name one domestic use of substance Z.
- Write a balanced chemical equation of the reaction which takes place when metal X burns in air to form powder Y.

**Solution :**

- Magnesium, Mg.
- Magnesium oxide,  $\text{MgO}$
- Oxygen (of air),  $\text{O}_2$
- Magnesium hydroxide,  $\text{Mg(OH)}_2$ ; Used as antacid to relieve indigestion
- $2\text{Mg} + \text{O}_2 \rightarrow 2\text{MgO}$

**Question 51:**

A metal X forms a salt  $\text{XSO}_4$ . The salt  $\text{XSO}_4$  forms a clear solution in water which reacts with sodium hydroxide solution to form a blue precipitate Y. Metal X is used in making electric wires and alloys like brass.

- What do you think metal X could be ?
- Write the name, formula and colour of salt  $\text{XSO}_4$ .
- What is the blue precipitate Y ?
- Write a chemical equation of the reaction which takes place when salt  $\text{XSO}_4$  reacts with sodium hydroxide solution. Give the state symbols of all the reactants and products which occur in the above equation.

**Solution :**

- Copper, Cu.

- (b) Copper sulphate,  $\text{CuSO}_4$ , Blue colour.  
 (c) Copper hydroxide,  $\text{Cu}(\text{OH})_2$   
 (d)  $\text{CuSO}_4 (\text{aq}) + 2\text{NaOH} (\text{aq}) \rightarrow \text{Cu}(\text{OH})_2 (\text{s}) + \text{Na}_2\text{SO}_4 (\text{aq})$

**Question 52:**

The metal M reacts vigorously with water to form a solution S and a gas G. The solution S turns red litmus to blue whereas gas G, which is lighter than air, burns with a pop sound. Metal M has a low melting point and it is used as a coolant in nuclear reactors.

- (a) What is metal M ?  
 (b) What is solution S ? Is it acidic or alkaline ?  
 (c) What is gas G ?  
 (d) Write a balanced chemical equation for the reaction which takes place when metal M reacts with water.  
 (e) Is this reaction exothermic or endothermic ?

**Solution :**

- (a) Sodium, Na.  
 (b) Sodium hydroxide solution (NaOH solution), Alkaline. (c) Hydrogen,  $\text{H}_2$   
 (d)  $2\text{Na} + 2\text{H}_2\text{O} \rightarrow 2\text{NaOH} + \text{H}_2$   
 (e) Exothermic.

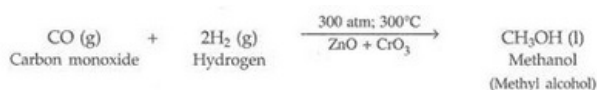
**Question 53:**

When a mixture of gases X and Y is compressed to 300 atm pressure and then passed over a catalyst consisting of a mixture of zinc oxide and chromium oxide (heated to a temperature of  $300^\circ\text{C}$ ), then an organic compound Z having the molecular formula  $\text{CH}_4\text{O}$  is formed. X is a highly poisonous gas which is formed in appreciable amounts when a fuel burns in a limited supply of air ; Y is a gas which can be made by the action of a dilute acid on an active metal; and Z is a liquid organic compound which can react with sodium metal to produce hydrogen gas.

- (a) What are X, Y and Z ?  
 (b) Write a balanced chemical equation of the reaction which takes place when X and Y combine to form Z. Indicate the conditions under which the reaction occurs.

**Solution :**

- (a) X is carbon monoxide gas ( $\text{CO}$ ); Y is hydrogen gas ( $\text{H}_2$ ) ; Z is methanol (or Methyl alcohol) ( $\text{CH}_3\text{OH}$ )  
 ( $\text{CH}_4\text{O} = \text{CH}_3\text{OH}$ )  
 (b) Formation of Z:



The conditions for this reaction to take place are: a pressure of 300 atmospheres (written as 300 atm), a temperature of  $300^\circ\text{C}$ , and a catalyst which is a mixture of zinc oxide and chromium oxide ( $\text{ZnO} + \text{CrO}_3$ ).

**Question 54:**

The white solid compound A decomposes quite rapidly on heating in the presence of a black substance X to form a solid compound B and a gas C. When an aqueous solution of compound B is reacted with silver nitrate solution, then a white precipitate of silver chloride is obtained along with potassium nitrate solution. Gas C does not burn itself but helps burn other things.

- (a) What is compound A ?  
 (b) What is compound B ?  
 (c) What is gas C ?

(d) What do you think is the black substance X ? What is its function ?

(e) What is the general name of substances like X ?

**Solution :**

(a) Potassium chlorate,  $\text{KClO}_3$

(b) Potassium chloride,  $\text{KCl}$

(c) Oxygen,  $\text{O}_2$

(d) Manganese dioxide,  $\text{MnO}_2$ ; It acts as a catalyst in the decomposition of potassium chlorate to form oxygen gas

(e) Catalysts

**Question 55:**

Gas A, which is the major cause of global warming, combines with hydrogen oxide B in nature in the presence of an environmental factor C and a green material D to form a six carbon organic compound E and a gas F. The gas F is necessary for breathing.

(a) What is gas A ?

(b) What is the common name of B ?

(c) What do you think could be C ?

(d) What is material D ? Where is it found ?

**Solution :**

(a) Carbon dioxide,  $\text{CO}_2$

(b) Water,  $\text{H}_2\text{O}$

(c) Sunlight.

(d) Chlorophyll; Green leaves of plants.

(e) Glucose,  $\text{C}_6\text{H}_{12}\text{O}_6$

(f) Oxygen;

Photosynthesis.

#### Lakhmir Singh Chemistry Class 10 Solutions Page No:45

**Question 1:**

What type of reaction is represented by the digestion of food in our body ?

**Solution :**

Decomposition reaction.

**Question 2:**

Name the various types of chemical reactions.

**Solution :**

The various types of chemical reactions are:

1. Combination reactions.
2. Decomposition reaction.
3. Displacement reaction.
4. Double displacement reaction.
5. Oxidation and reduction reactions.

**Question 3:**

Why does the colour of copper sulphate solution change when an iron nail is kept immersed in it ?

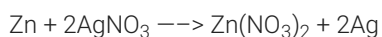
**Solution :**

The colour of copper sulphate solution changes when iron nail is kept immersed in it due to the displacement reaction taking place between iron and copper leading to formation of iron sulphate.

**Question 4:**

Write the balanced chemical equation for the following reaction :

Zinc + Silver nitrate  $\rightarrow$  Zinc nitrate + Silver

**Solution :****Question 5:**

Which term is used to indicate the development of unpleasant smell and taste in fat and oil containing foods due to aerial oxidation (when they are kept exposed for a considerable time) ?

**Solution :**

Rancidity.

**Question 6:**

What is the general name of the chemicals which are added to fat and oil containing foods to prevent the development of rancidity

**Solution :**

Anti-oxidants.

**Question 7:**

State an important use of decomposition reactions.

**Solution :**

The digestion of food in the body is an example of decomposition reaction.

**Question 8:**

What are anti-oxidants ? Why are they added to fat and oil containing foods ?

**Solution :**

Anti-oxidant is a substance which prevents oxidation. They are added to fat and oil containing foods so that they do not get oxidized easily and hence do not turn rancid.

**Question 9:**

Explain why, food products containing fats and oils (like potato chips) are packaged in nitrogen.

**Solution :**

Food products containing fats and oils are packaged in nitrogen so that there is no oxygen to cause oxidation of food and make it rancid.

**Question 10:**

Give one example of a decomposition reaction which is carried out:

- (a) with electricity
- (b) by applying heat

**Solution :**

- (a) When fused sodium chloride is decomposed by passing electricity, sodium metal is obtained.
- (b) When lead nitrate is heated strongly, it breaks down to form lead monoxide, nitrogen dioxide and oxygen.

**Question 11:**

What type of chemical reaction is used to extract metals from their naturally occurring compounds like oxides or chlorides ?

**Solution :**

Decomposition reactions (carried out by electricity).

**Question 12:**

Name two anti-oxidants which are usually added to fat and oil containing foods to prevent rancidity.

**Solution :**

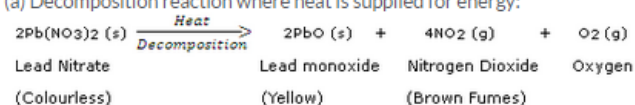
BHA (Butylated Hydroxy Anisole) and BHT (Butylated Hydroxy Toluene).

**Question 13:**


Write one equation each for the decomposition reactions where energy is supplied in the form of (a) heat, (b) light, and (c) electricity.

**Solution :**

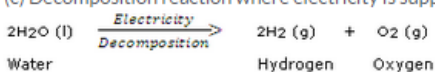
(a) Decomposition reaction where heat is supplied for energy:



(b) Decomposition reaction where light is supplied for energy:



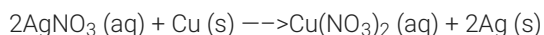
(c) Decomposition reaction where electricity is supplied for energy:



**Question 14:**

In the refining of silver, the recovery of silver from silver nitrate solution involved displacement by copper metal. Write down the chemical equation of the reaction involved.

**Solution :**



**Question 15:**

What type of reactions are represented by the following equations ?

1.  $\text{CaCO}_3 \rightarrow \text{CaO} + \text{CO}_2$
2.  $\text{CaO} + \text{H}_2\text{O} \rightarrow \text{Ca}(\text{OH})_2$
3.  $2\text{FeSO}_4 \rightarrow \text{Fe}_2\text{O}_3 + \text{SO}_2 + \text{SO}_3$
4.  $\text{NH}_4\text{Cl} \rightarrow \text{NH}_3 + \text{HCl}$
5.  $2\text{Ca} + \text{O}_2 \rightarrow 2\text{CaO}$

**Solution :**

1. Decomposition.
2. Combination.
3. Decomposition.
4. Decomposition.
5. Combination.

**Question 16:**

What type of chemical reactions take place when :

- (a) a magnesium wire is burnt in air ?
- (b) lime-stone is heated ?
- (c) silver bromide is exposed to sunlight ?
- (d) electricity is passed through water ?
- (e) ammonia and hydrogen chloride are mixed ?

**Solution :**

- (a) Combination.
- (b) Decomposition.
- (c) Decomposition.
- (d) Decomposition.
- (e) Combination.

**Question 17:**

What type of chemical reactions are represented by the following equations ?

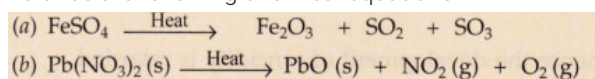
1.  $A + BC \rightarrow AC + B$
2.  $A + B \rightarrow C$
3.  $X \rightarrow Y + Z$
4.  $PQ + RS \rightarrow PS + RQ$
5.  $A_2O_3 + 2B \rightarrow B_2O_3 + 2A$

**Solution :**

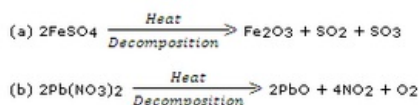
1. Displacement reaction.
2. Combination reaction.
3. Decomposition reaction.
4. Double displacement reaction.
5. Displacement reaction.

**Question 18:**

Balance the following chemical equations :



**Solution :**



**Question 19:**

Which of the following is a combination and which is a displacement reaction ?

- (a)  $Cl_2 + 2KI \rightarrow 2KCl + I_2$
- (b)  $2K + Cl_2 \rightarrow 2KCl$

**Solution :**


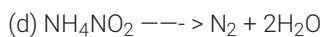
- (a) Displacement reaction.
- (b) Combination reaction.

**Question 20:**

What type of reactions are represented by the following equations ?

- (a)  $CaO + CO_2 \rightarrow CaCO_3$
- (b)  $2Na + 2H_2O \rightarrow 2NaOH + H_2$
- (c)  $Mg + CuSO_4 \rightarrow MgSO_4 + Cu$



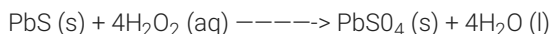


**Solution :**

- (a) Combination reaction.
- (b) Displacement reaction.
- (c) Displacement reaction.
- (d) Decomposition reaction.
- (e) Double displacement reaction.

**Question 21:**

In the following reaction between lead sulphide and hydrogen peroxide :



- (a) Which substance is reduced ?
- (b) Which substance is oxidised ?

**Solution :**

- (a)  $\text{H}_2\text{O}_2$
- (b)  $\text{PbS}$

**Question 22:**

Identify the component oxidised in the following reaction :

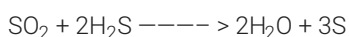


**Solution :**

$\text{H}_2\text{S}$

**Question 23:**

When  $\text{SO}_2$  gas is passed through saturated solution of  $\text{H}_2\text{S}$ , the following reaction occurs :



In this reaction, which substance is oxidised and which one is reduced ?

**Solution :**

Substance oxidised:  $\text{H}_2\text{S}$

Substance reduced:  $\text{SO}_2$

**Question 24:**

Fill in the following blanks with suitable words :

- (a) The addition of oxygen to a substance is called ..... whereas removal of oxygen is called.....
- (b) The addition of hydrogen to a substance is called..... whereas removal of hydrogen is called.....
- (c) Anti-oxidants are often added to fat containing foods to prevent..... due to oxidation.

**Solution :**

- (a) Oxidation; reduction.
- (b) Reduction; oxidation.
- (c) Rancidity.

**Question 25:**

What is an oxidation reaction ? Identify in the following reaction

(i) the substance oxidised, and (ii) the substance reduced :



**Solution :**

Oxidation Reaction: The addition of oxygen (or removal of hydrogen) to a substance is called oxidation.

- (i) C (ii)  $\text{ZnO}$

**Question 26:**

- (a) What is a redox reaction ? Explain with an example.
- (b) When a magnesium ribbon burns in air with a dazzling flame and forms a white ash, is magnesium oxidised or reduced ? Why ?
- (c) In the reaction represented by the equation :
- $$\text{MnO}_2 + 4\text{HI} \longrightarrow \text{MnCl}_2 + 2\text{H}_2\text{O} + \text{Cl}_2$$

1. name the substance oxidised.
2. name the oxidising agent.
3. name the substance reduced.
4. name the reducing agent.

**Solution :**

(a) The oxidation and reduction reactions occurring together are called a redox reaction.

Example:

In this reaction, copper oxide is being reduced to copper whereas hydrogen is being oxidised to water.

(b) Magnesium is oxidised as addition of oxygen to magnesium takes place leading to



(c)

1. HCl
2. MnO<sub>2</sub>
3. MnO<sub>2</sub>
4. HCl

**Lakhmir Singh Chemistry Class 10 Solutions Page No:47****Question 27:**

- (a) Define a combination reaction.
- (b) Give one example of a combination reaction which is also exothermic.
- (c) Give one example of a combination reaction which is also endothermic.

**Solution :**

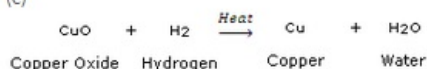
(a) Those reactions in which two or more substances combine to form a single substance is called a combination reaction.

**Question 28:**

- (a) Give an example of an oxidation reaction.
- (b) Is oxidation an exothermic or an endothermic reaction ?
- (c) Explain, by giving an example, how oxidation and reduction proceed side by side.

**Solution :**

(c)



In this reaction, copper oxide is being reduced to copper whereas hydrogen is being oxidised to water.

**Question 29:**

- (a) What is the colour of ferrous sulphate crystals ? How does this colour change after

heating ?

(b) Name the product formed on strongly heating ferrous sulphate crystals. What type of chemical reaction

occurs in this change ?

**Solution :**

(a) The colour of ferrous sulphate is green. It changes to brown after heating.

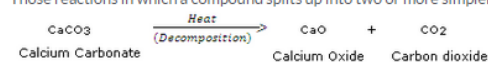
(b) The product formed is ferric oxide. This is a decomposition reaction.

### Question 30:

What is a decomposition reaction ? Give an example of a decomposition reaction. Describe an activity to illustrate such a reaction by heating.

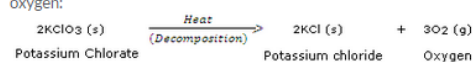
**Solution :**

Those reactions in which a compound splits up into two or more simpler substances is called a decomposition reaction.



When calcium carbonate is heated, it decomposes to give calcium oxide and carbon dioxide.

Activity: When potassium chlorate is heated in the presence of manganese dioxide catalyst, it decomposes to give potassium chloride and oxygen:



This decomposition takes place in the presence of heat and catalyst. In this decomposition reaction, a single compound, potassium chlorate, is splitting up into two simpler substances, potassium chloride and oxygen. This decomposition reaction is used for preparing oxygen gas in the laboratory.

### Question 31:

Zinc oxide reacts with carbon, on heating, to form zinc metal and carbon monoxide. Write a balanced chemical equation for this reaction. Name (i) oxidising agent, and (ii) reducing agent, in this reaction.

**Solution :**



(i) Zinc oxide.

(ii) Carbon.

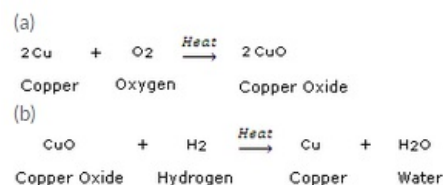
### Question 32:

Give one example of an oxidation-reduction reaction which is also :

(a) a combination reaction

(b) a displacement reaction

**Solution :**



### Question 33:

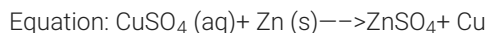
(a) What is the difference between displacement and double displacement reactions ? Write equations for these reactions.

(b) What do you mean by a precipitation reaction ? Explain giving an example.

**Solution :**

(a) Those reactions in which one element takes the place of another element in a compound,

are known as displacement reactions.

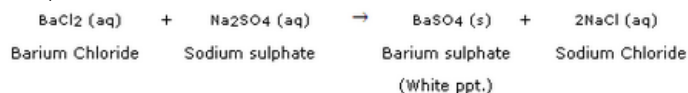


Those reactions in which two compounds react by an exchange of ions to form two new compounds are called double displacement reactions.



(b) Any reaction in which an insoluble solid (called precipitate) is formed that separates from the solution is called a precipitation reaction.

Example: The reaction between barium chloride and sodium sulphate solution to form a white barium sulphate precipitate (along with sodium chloride solution) is an example of a precipitation reaction.



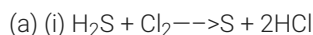
### Question 35:

(a) Define the following in terms of gain or loss of hydrogen with one example each :

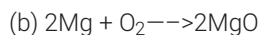
(i) oxidation (ii) reduction

(b) When a magnesium ribbon is heated, it burns in air to form magnesium oxide. Write a balanced chemical equation for this reaction. Name (i) substance oxidised, and (ii) substance reduced.

### Solution :



In this reaction,  $\text{H}_2\text{S}$  is changing into  $\text{S}$ . That is, Hydrogen is being removed from hydrogen sulphide. Now, by definition, the removal of hydrogen from a compound is called oxidation, so, we can say that hydrogen sulphide is being oxidised to sulphur. On the other hand,  $\text{Cl}_2$  is changing into  $\text{HCl}$ . That is, hydrogen is being added to chlorine. By definition, the addition of hydrogen to a substance is called reduction, so we can say that chlorine is being reduced to hydrogen chloride.



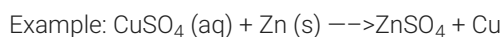
(i)  $\text{Mg}$  (ii)  $\text{O}_2$

### Question 36:

What is meant by (a) displacement reaction, and (b) double displacement reaction ? Explain with the help of one example each.

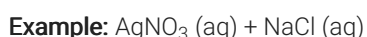
### Solution :

(a) Those reactions in which one element takes the place of another element in a compound, are known as displacement reactions.



When a strip of zinc metal is placed in copper sulphate solution, then zinc sulphate solution and copper are obtained. In this reaction, zinc displaces copper from copper sulphate compound so that copper is set free. The blue colour of copper sulphate solution fades due to the formation of zinc sulphate.

(b) Those reactions in which two compounds react by an exchange of ions to form two new compounds are called double displacement reactions.



When silver nitrate solution is added to sodium chloride solution, then a white precipitate of silver chloride is formed along with sodium nitrate solution. In this reaction, two compounds, silver nitrate and sodium chloride, react to form two new compounds, silver chloride and sodium nitrate.

### Question 37:

(a) Why are decomposition reactions called the opposite of combination reactions ? Explain

with equations  
of these reactions.

(b) Express the following facts in the form of a balanced chemical equation :

"When a strip of copper metal is placed in a solution of silver nitrate, metallic silver is precipitated and a solution containing copper nitrate is formed".

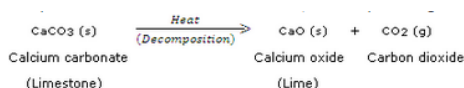
**Solution :**

Those reactions in which a compound splits up into two or more simpler substances are known as decomposition reactions.

Example: When calcium carbonate is heated, it decomposes to give calcium oxide and carbon dioxide.

They are called opposite of combination reactions because in a combination reaction, two or more substances combine to form a single substance.

Example: Magnesium and oxygen combine, when heated, to form magnesium oxide.



They are called opposite of combination reactions because in a combination reaction, two or more substances combine to form a single substance.  
Example: Magnesium and oxygen combine, when heated, to form magnesium oxide.



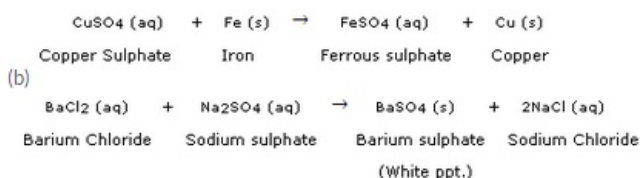
### Question 38:

(a) What happens when a piece of iron metal is placed in copper sulphate solution ? Name the type of reaction involved.

(b) Write balanced chemical equation with state symbols for the following reaction :Barium chloride solution reacts with sodium sulphate solution to give insoluble barium sulphate and a solution of sodium chloride.


**Solution :**

(a) When a piece of iron metal is placed in copper sulphate solution, then magnesium sulphate solution and copper metal are formed. This is a type of displacement reaction.



### Question 39:

In the reaction represented by the following equation :



- name the substance oxidised
- name the substance reduced
- name the oxidising agent
- name the reducing agent

**Solution :**

- H<sub>2</sub>
- CuO
- CuO
- H<sub>2</sub>

### Question 40:

What happens when silver nitrate solution is added to sodium chloride solution ?

(a) Write the equation for the reaction which takes place.

(b) Name the type of reaction involved.

**Solution :**

When silver nitrate

solution is added to sodium chloride solution, then a white precipitate of silver chloride is formed along with sodium nitrate solution.

(a)  $\text{AgNO}_3(\text{aq}) + \text{NaCl}(\text{aq})$

(b) Double displacement reaction.

**Question 41:**

What happens when silver chloride is exposed to sunlight ? Write a chemical equation for this reaction. Also give one use of such a reaction.

**Solution :**

When silver chloride is exposed to light, it decomposes to form silver metal and chlorine gas.



This reaction is used in black and white photography.

**Question 42:**

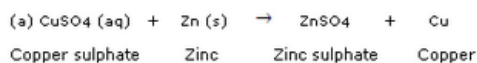
What happens when a zinc strip is dipped into a copper sulphate solution ?

(a) Write the equation for the reaction that takes place.

(b) Name the type of reaction involved.

**Solution :**

When a strip of zinc metal is placed in copper sulphate solution, then zinc sulphate solution and copper are obtained.



**Chemical Reactions and Equations – Lakhmir Singh  
class 10 Chemistry Solutions 42**

(b) Displacement reaction.

**Lakhmir Singh Chemistry Class 10 Solutions Page No:48**

**Question 43:**

(a) Explain the term "corrosion" with an example. Write a chemical equation to show the process of corrosion of iron.

(b) What special name is given to the corrosion of iron ?

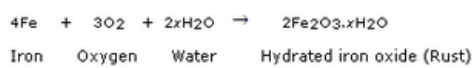
(c) What type of chemical reaction is involved in the corrosion of iron ?

(d) Name any three objects (or structures) which are gradually damaged by the corrosion of iron and steel.

**Solution :**

(a) Corrosion is the process in which metals are eaten up gradually by the action of air, moisture or a chemical (such as an acid) on their surface. Rusting of iron metal is the most common form of corrosion.

During the corrosion of iron, iron metal is oxidised by the oxygen of air in the presence of water (moisture) to form hydrated iron oxide called rust.



- (b) Rusting.
- (c) Oxidation.
- (d) Railings, car bodies and bridges.

**Question 44:**

- (a) Explain the term "rancidity". What damage is caused by rancidity ?
- (b) What type of chemical reaction is responsible for causing rancidity ?
- (c) State and explain the various methods for preventing or retarding rancidity of food.

**Solution :**

(a) The condition produced by aerial oxidation of fats and oils in foods marked by unpleasant smell and taste is called rancidity. It spoils the food materials prepared in fats and oils which have been kept for a considerable time and makes them unfit for eating.

- (b) Oxidation.
- (c)

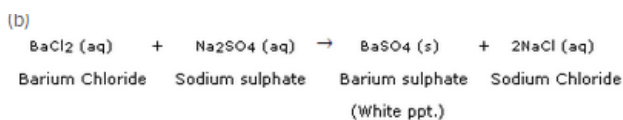
1. Rancidity can be prevented by adding anti-oxidants to foods containing fats and oils.
2. It can be prevented by packaging fat and oil containing foods in nitrogen gas.
3. Rancidity can be retarded by keeping food in a refrigerator.
4. Rancidity can be prevented by storing food in air-tight containers.
5. Storing foods away from light can also prevent rancidity.

**Question 45:**

- (a) What happens when an aqueous solution of sodium sulphate reacts with an aqueous solution of barium chloride ?
- (b) Write the balanced chemical equation for the reaction which takes place.
- (c) State the physical conditions of reactants in which the reaction will not take place.
- (d) Name the type of chemical reaction which occurs.
- (e) Give one example of another reaction which is of the same type as the above reaction.

**Solution :**

(a) When barium chloride solution is added to sodium sulphate solution, then a white precipitate of barium sulphate is formed along with sodium chloride solution.



- (c) Solid sodium sulphate and Solid barium chloride
- (d) Double displacement reaction.
- (e) Double displacement reaction between silver nitrate solution and sodium chloride solution forms a white precipitate of silver chloride and sodium nitrate solution.

**Lakhmir Singh Chemistry Class 10 Solutions Page No:49**

**Question 58:**


When a green iron salt is heated strongly, its colour finally changes to brown and odour of burning sulphur is given out.

- (a) Name the iron salt.
- (b) Name the type of reaction that takes place during the heating of iron salt.
- (c) Write a chemical equation for the reaction involved.

**Solution :**

- (a) Ferrous sulphate.
- (b) Decomposition reaction.

(c)



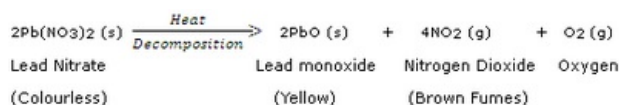
**Question 59:**

A colourless lead salt, when heated, produces a yellow residue and brown fumes.

- (a) Name the lead salt.
- (b) Name the brown fumes.
- (c) Write a chemical equation of the reaction involved.

**Solution :**

- (a) Lead nitrate.
- (b) Nitrogen dioxide.
- (c)



**Question 60:**

When hydrogen burns in oxygen, water is formed and when water is electrolysed, then hydrogen and oxygen are produced. What type of reaction takes place :

- (a) in the first case ?
- (b) in the second case ?

**Solution :**

- (a) Combination reaction.
- (b) Decomposition reaction.

**Question 61:**

A strip of metal X is dipped in a blue coloured salt solution  $\text{YSO}_4$ . After some time, a layer of metal Y from the salt solution is formed on the surface of metal strip X. Metal X is used in galvanisation whereas metal Y is used in making electric wires. Metal X and metal Y together form an alloy Z.

- (a) What could metal X be ?
- (b) What could metal Y be ?
- (c) Name the metal salt  $\text{YSO}_4$ .
- (d) What type of chemical reaction takes place when metal X reacts with salt solution  $\text{YSO}_4$  ?  
Write the equation of the chemical reaction involved.
- (e) Name the alloy Z.

**Solution :**

- (b) Copper (Cu)
- (c) Copper sulphate ( $\text{CuSO}_4$ )
- (d) Displacement reaction;  
 $\text{CuSO}_4 (\text{aq}) + \text{Zn} (\text{s})$   
 $\text{ZnSO}_4 (\text{aq}) + \text{Cu} (\text{s})$
- (e) Brass

**Question 62:**

When a black metal compound  $\text{XO}$  is heated with a colourless gas  $\text{Y}_2$ , then metal X and another compound  $\text{Y}_2\text{O}$  are formed. Metal X is red-brown in colour which does not react with dilute acids at all. Gas  $\text{Y}_2$  can be prepared by the action of a dilute acid on any active metal. The compound  $\text{Y}_2\text{O}$  is a liquid at room temperature which can turn anhydrous copper sulphate blue.



- (a) What do you think is metal X ?
- (b) What could be gas  $Y_2$  ?
- (c) What is compound XO ?
- (d) What is compound  $Y_2O$ ?
- (e) Write the chemical equation of the reaction which takes place on heating XO with  $Y_2$ .
- (f) What type of chemical reaction is illustrated in the above equation ?

**Solution :**

- (a) Copper (Cu)
- (b) Hydrogen ( $H_2$ )
- (c) Copper oxide (CuO)
- (d) Water ( $H_2O$ )
- (e)  $CuO + H_2$   
 $Cu + H_2O$
- (f) Displacement reaction (which is also a redox reaction).

**Question 63:**

A metal X forms a water soluble salt  $XNO_3$ . When an aqueous solution of  $XNO_3$  is added to common salt solution, then a white precipitate of compound Y is formed along with sodium nitrate solution. Metal X is said to be the best conductor of electricity and it does not evolve hydrogen when put in dilute hydrochloric acid.

- (a) What is metal X ?
- (b) What is salt  $XNO_3$  ?
- (c) Name the compound Y.
- (d) Write the chemical equation of the reaction which takes place on reacting  $XNO_3$  solution and common salt solution giving the physical states of all the reactants and products.
- (e) What type of chemical reaction is illustrated by the above equation ?

**Solution :**

- Silver (Ag)
- (b) Silver nitrate ( $AgNO_3$ )
- (c) Silver chloride (AgCl)
- (d)  $AgNO_3(aq) + NaCl(aq) \rightarrow AgCl(s) + NaNO_3(aq)$
- (e) Double displacement reaction.

**Lakhmir Singh Chemistry Class 10 Solutions Page No:50**

**Question 64:**

Two metals X and Y form the salts  $XSO_4$  and  $Y_2SO_4$ , respectively. The solution of salt  $XSO_4$  is blue in colour whereas that of  $Y_2SO_4$  is colourless. When barium chloride solution is added to  $XSO_4$  solution, then a white precipitate Z is formed along with a salt which turns the solution green. And when barium chloride solution is added to  $Y_2SO_4$  solution, then the same white precipitate Z is formed along with colourless common salt solution.

- (a) What could the metals X and Y be ?
- (b) Write the name and formula of salt  $XSO_4$ .
- (c) Write the name and formula of salt  $Y_2SO_4$ .
- (d) What is the name and formula of white precipitate Z ?
- (e) Write the name and formula of the salt which turns the solution green in the first case.

**Solution :**

- (a) Metal X : Copper; Metal Y : Sodium
- (b) Copper sulphate,  $CuSO_4$
- (c) Sodium sulphate,  $Na_2SO_4$
- (d) Barium sulphate,  $BaSO_4$
- (e) Copper chloride,  $CuCl_2$

**Question 65:**

A red-brown metal X forms a salt  $XSO_4$ . When hydrogen sulphide gas is passed through an aqueous solution of  $XSO_4$ , then a black precipitate of XS is formed along with sulphuric acid solution.

- (a) What could the salt  $XSO_4$  be ?
- (b) What is the colour of salt  $XSO_4$  ?
- (c) Name the black precipitate XS.
- (d) By using the formula of the salt obtained in (a) above, write an equation of the reaction which takes place when hydrogen sulphide gas is passed through its aqueous solution.
- (e) What type of chemical reaction takes place in this case ?

**Solution :**

- (a) Copper sulphate.
- (b) Blue colour.
- (c) Copper sulphide.
- (d)  $CuSO_4 (aq) + H_2S (g) \rightarrow CuS (s) + H_2SO_4 (aq)$
- (e) Double displacement reaction.

**Question 66:**

When a strip of red-brown metal X is placed in a colourless salt solution  $YNO_3$  then metal Y is set free and a blue coloured salt solution  $X(NO_3)_2$  is formed. The liberated metal Y forms a shining white deposit on the strip of metal X.

- (a) What do you think metal X is ?
- (b) Name the salt  $YNO_3$ .
- (c) What could be metal Y ?
- (d) Name the salt  $X(NO_3)_2$ .
- (e) What type of reaction takes place between metal X and salt solution  $YNO_3$  ?

**Solution :**

- (a) Copper.
- (b) Silver nitrate.
- (c) Silver.
- (d) Copper nitrate.
- (e) Displacement reaction.

**Question 67:**

A metal salt MX when exposed to light splits up to form metal M and a gas  $X_2$ . Metal M is used in making ornaments whereas gas  $X_2$  is used in making bleaching powder. The salt MX is itself used in black and white photography.

- (a) What do you think metal M is ?
- (b) What could be gas  $X_2$  ?
- (c) Name the metal salt MX.
- (d) Name any two salt solutions which on mixing together can produce a precipitate of salt MX.
- (e) What type of chemical reaction takes place when salt MX is exposed to light ? Write the equation of the reaction.

**Solution :**

- (a) Silver.
- (b) Chlorine.
- (c) Silver chloride.
- (d) Silver nitrate and Sodium chloride.
- (e) Decomposition reaction;

